





NAME _____ DATE _____

MEASURING LENGTHS



Measure the length of each picture with your centimeter cubes.



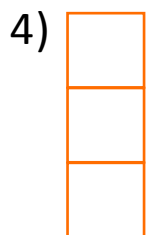
The pen is ____ centimeter cubes.




The eraser is ____ centimeter cubes.



The watermelon is ____ centimeter cubes.



The nail is ____ centimeter cubes.



The car is ____ centimeter cubes.